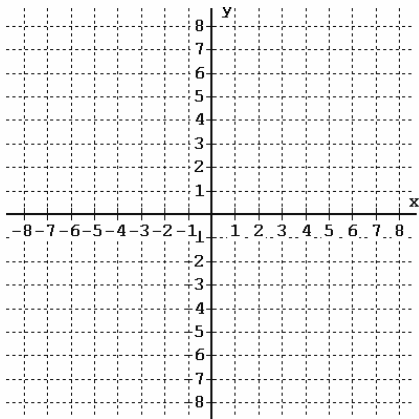
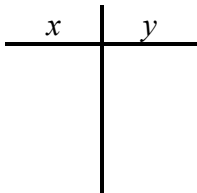


Graphing Lines & Finding Intercepts 1

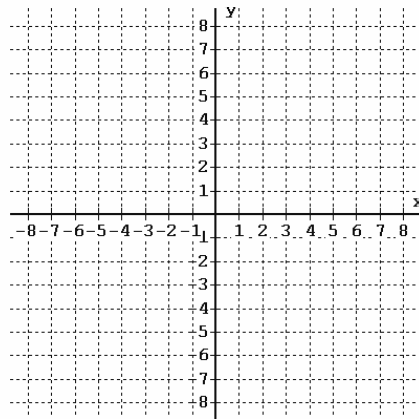


1) $y = 2x - 4$

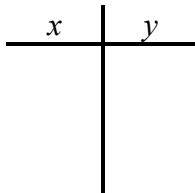


x-intercept: _____

y-intercept: _____

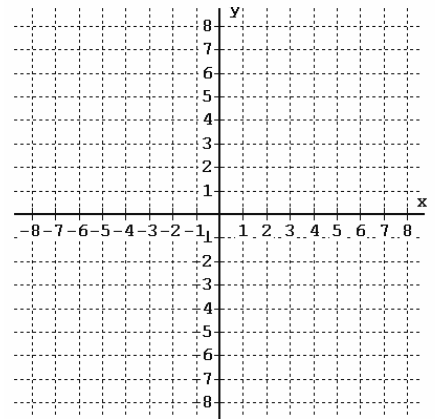


2) $y = 3x + 2$

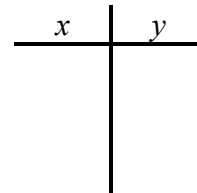


x-intercept: _____

y-intercept: _____

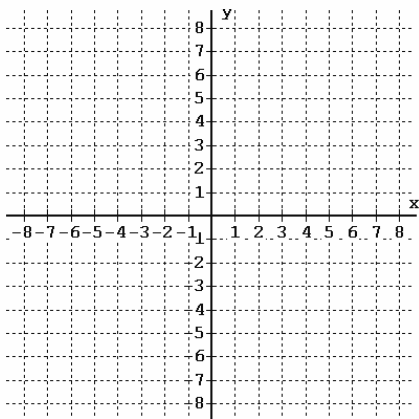


3) $x + 4y = 8$

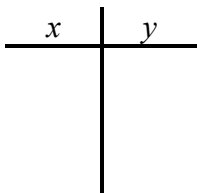


x-intercept: _____

y-intercept: _____

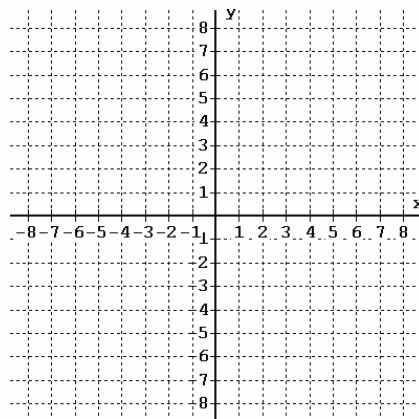


4) $3x - 2y = 8$

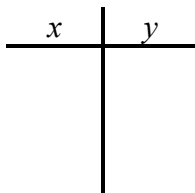


x-intercept: _____

y-intercept: _____

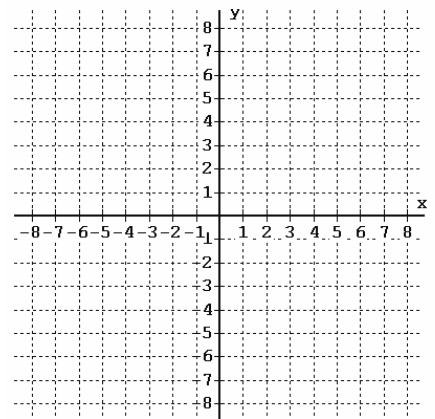


5) $x = 3$

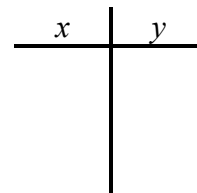


x-intercept: _____

y-intercept: _____



6) $y = -5$



x-intercept: _____

y-intercept: _____