

Perimeter & Area Worksheet I

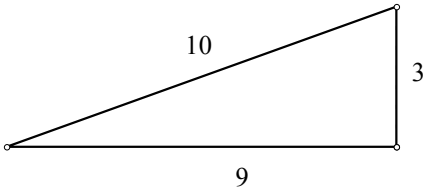
For each of the following plane figures, find the
Assume all units are in cm.

Perimeter & **Area**
Perimeter **Area**

1)

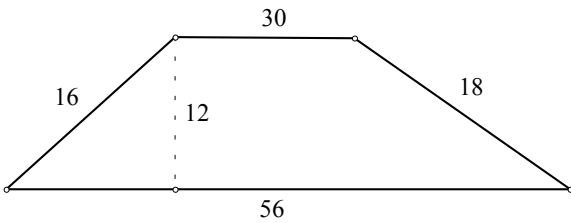


2)



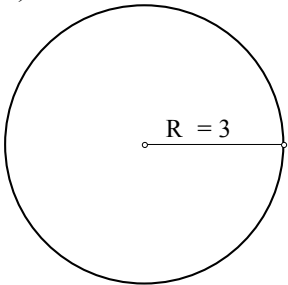
Perimeter **Area**

3)



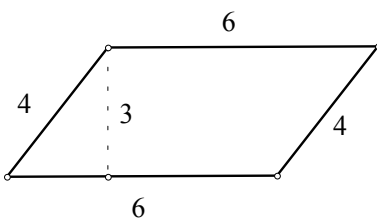
Perimeter **Area**

4)



Circumference **Area**

5)



Perimeter **Area**