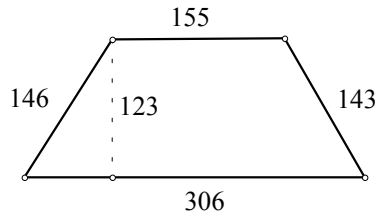


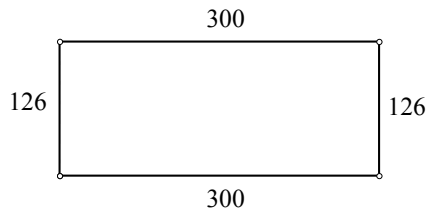
## Perimeter & Area Worksheet II

For each of the following plane figures, find the: **Perimeter** & **Area**  
Assume all units are in inches.

1)



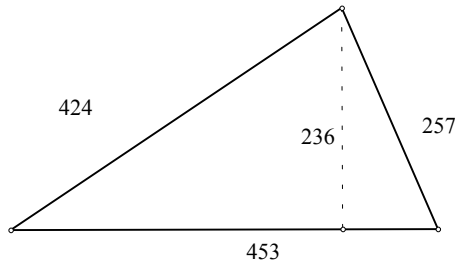
2)



**Perimeter**

**Area**

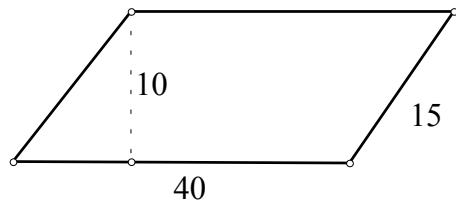
3)



**Perimeter**

**Area**

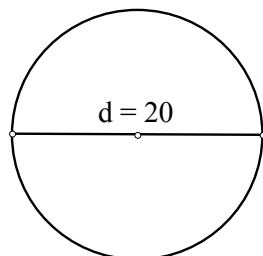
4)



**Perimeter**

**Area**

5)



**Circumference**

**Area**