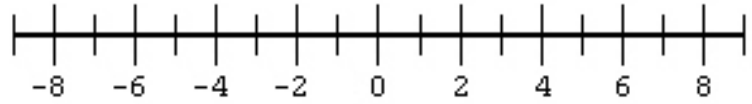


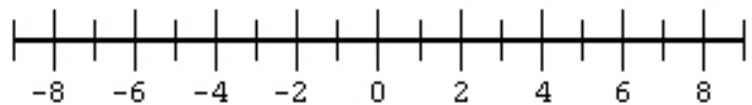
# Solving Linear Inequalities 1

**SOLVE** the following inequalities and **GRAPH** the solution on the number line.

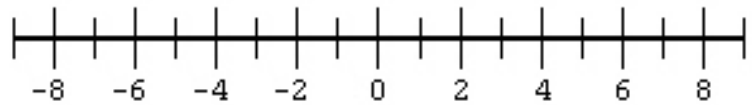
1)  $4x + 1 > 9$



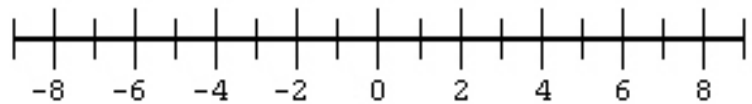
2)  $2x + 3 \leq 11$



3)  $3 - 4x \geq -9$



4)  $3 > x - 4$



5)  $x + 1 \leq 2x + 7$

