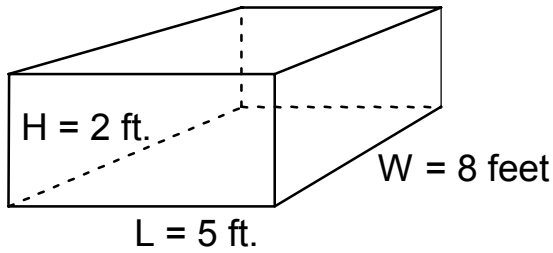


Volume Worksheet I

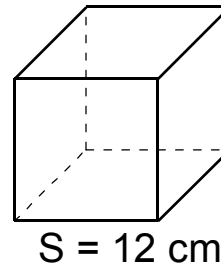
Find the VOLUME of each of the following Solids

Rectangular Solid



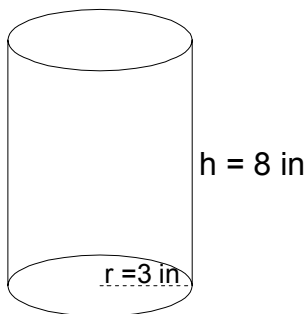
1) FORMULA:
VOLUME =

Cube



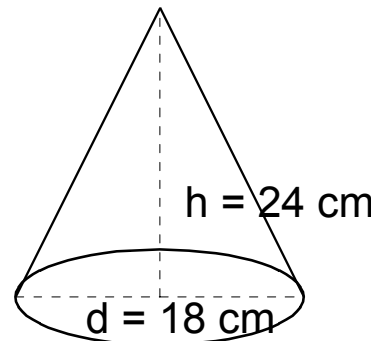
2) FORMULA:
VOLUME =

Cylinder



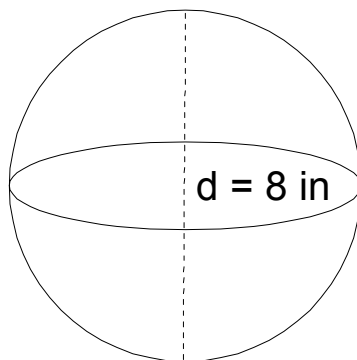
3) FORMULA:
VOLUME =

Cone



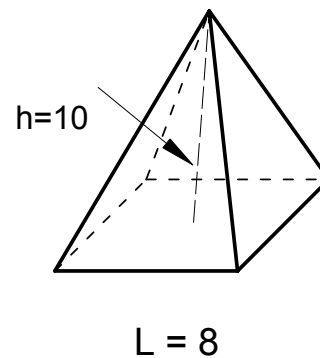
4) FORMULA:
VOLUME =

Sphere



5) FORMULA:
VOLUME =

Square Pyramid



6) Formula: $V = \frac{1}{3} \times (\text{Area of Base}) \times \text{height}$
VOLUME =